


Adım: _____

Paralarımız




Oyuncakların fiyatlarını, verilen paraları hesaplayarak bulalım.





Fiyat: TL



Fiyat: TL




Fiyat: TL



Fiyat: TL



Fiyat: TL



Fiyat: TL



Fiyat: TL



Fiyat: TL

